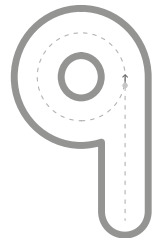
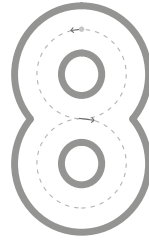
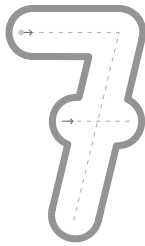
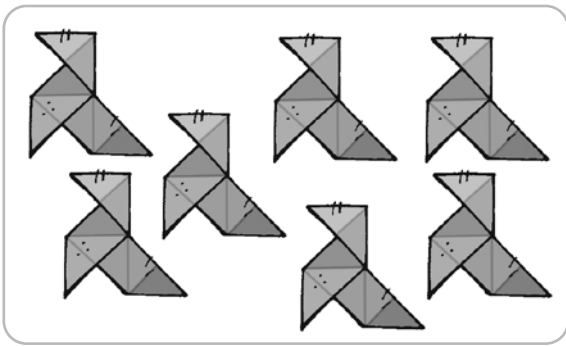


1 Repasa los números.

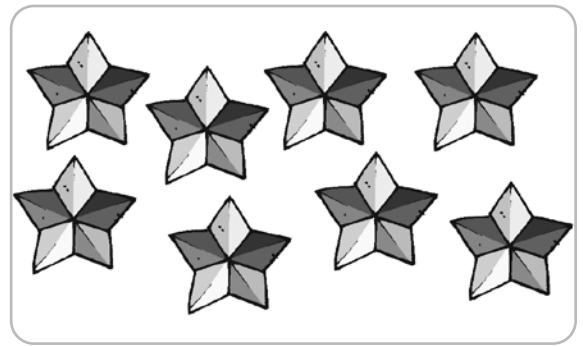


2 Cuenta y rodea el número en cada caso.



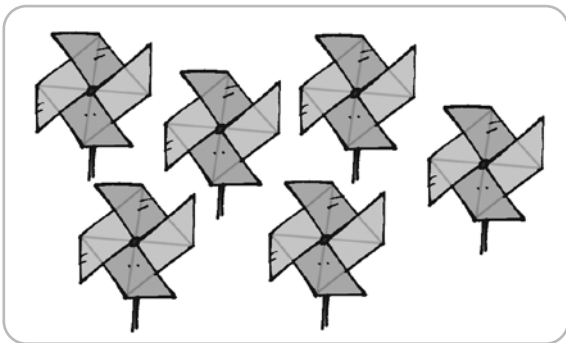
6

7



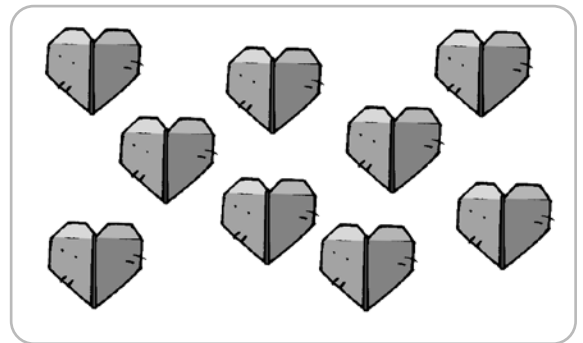
7

8



5

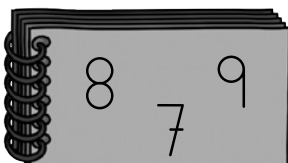
6



8

9

3 Observa la recta y ordena los números en cada caso.

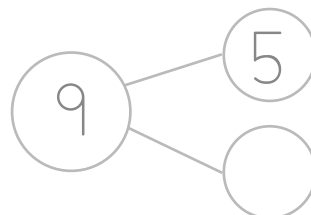
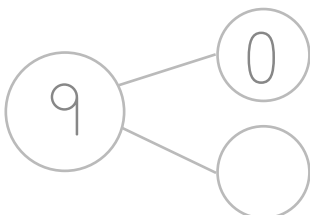
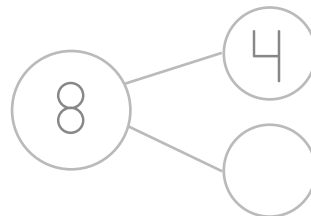
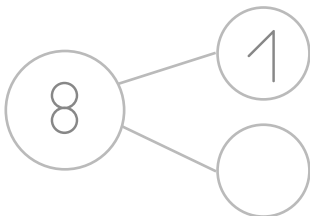
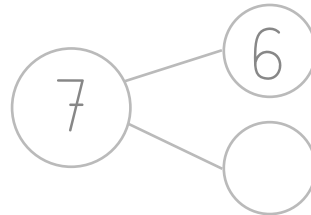
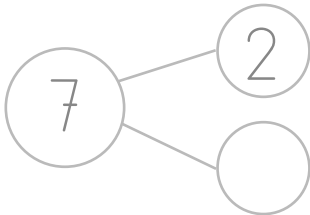
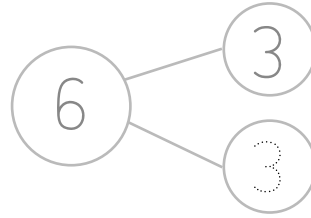
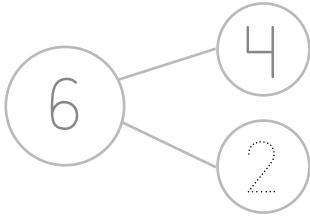


7		
---	--	--



5		
---	--	--

1 Completa con los números que faltan.



2 Escribe = o ≠.

$6 = 6$

$5 \bigcirc 1$

$8 \bigcirc 8$

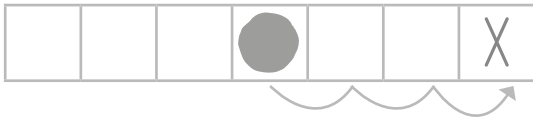
$4 \neq 2$

$7 \bigcirc 7$

$9 \bigcirc 3$

1 Mueve la ficha y marca con una cruz.

3 casillas hacia la derecha



2 casillas hacia la derecha



3 casillas hacia la izquierda



2 casillas hacia la izquierda



2 Ayuda a Mar a llegar hasta Teo. Colorea el camino.

3 → 6 ↓ 1 ← 2 ↓ 4 → 3 ↑ 3 →

